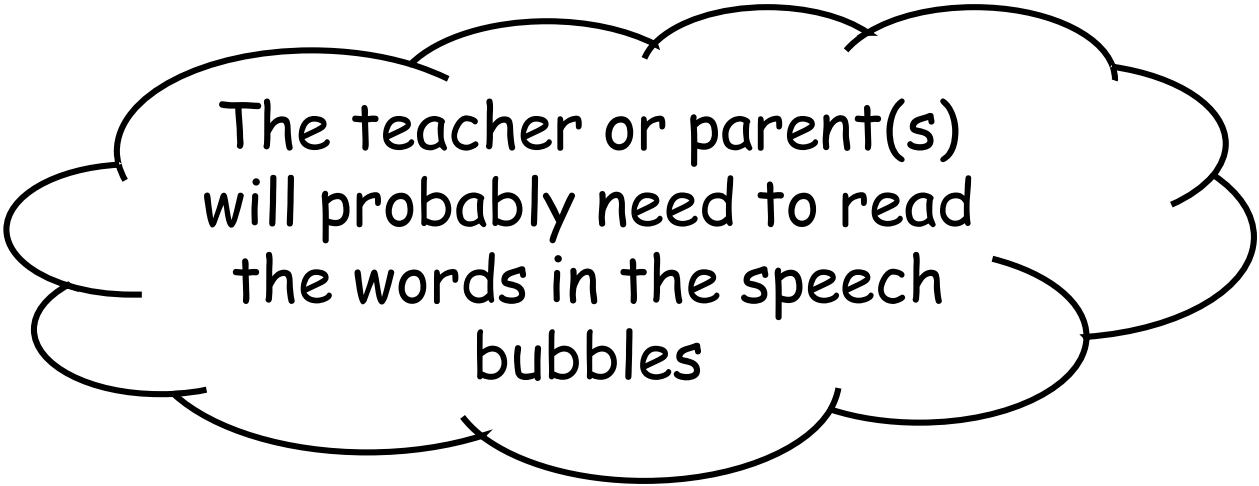


# One More and One Less

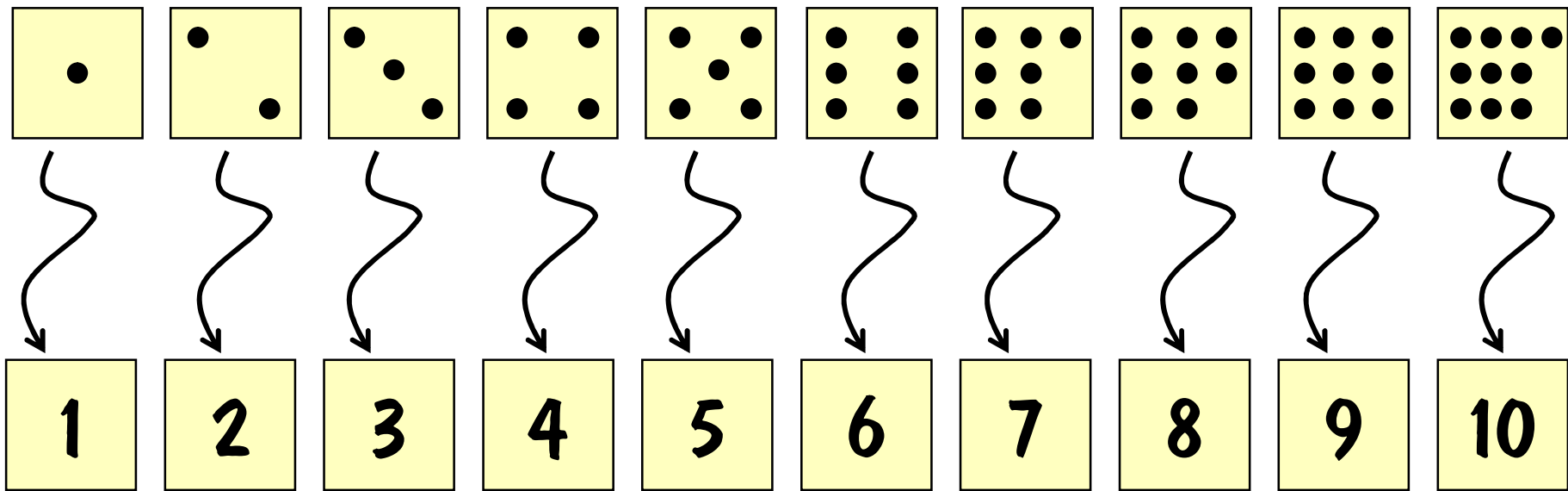
Objective: Given a number  
identify one more and one less



The teacher or parent(s)  
will probably need to read  
the words in the speech  
bubbles


## Terms and Conditions

To the best of the producer's knowledge, the academic content of this booklet is accurate but errors and omissions may be present and Brain-Cells: E.Resources Ltd cannot be held responsible for these or any lack of success experienced by individuals or groups or other parties using this material. The presentation is intended as support material for NC maths and is not a comprehensive pedagogy of all the maths topics designated by the National Curriculum for this level. The copyright proprietor has licensed this presentation for the purchaser's use as a personal learning aid and prohibits copying or reproduction in part or whole or its publication on the Internet or other media without the written permission of Brain-Cells: E.Resources Ltd.




The numbers tell us how many dots

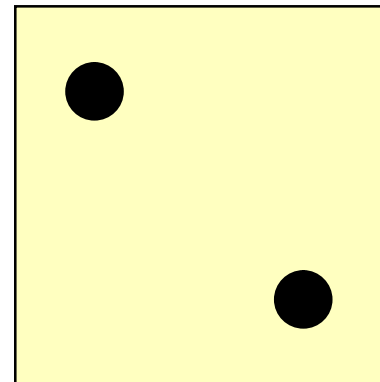
Which number for this many dots?



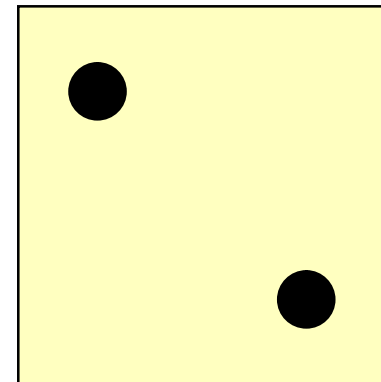
Which number for this many dots?




Which number for this many dots?




Which number for this many dots?



Which number for this many dots?




Which number for this many dots?







Which number for this many dots?




Which number for this many dots?




Which number for this many dots?




Which number for this many dots?

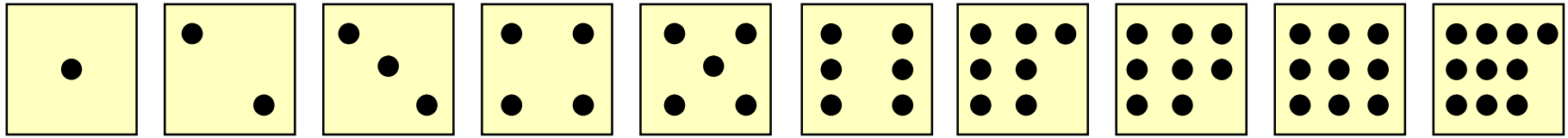


Which number for this many dots?

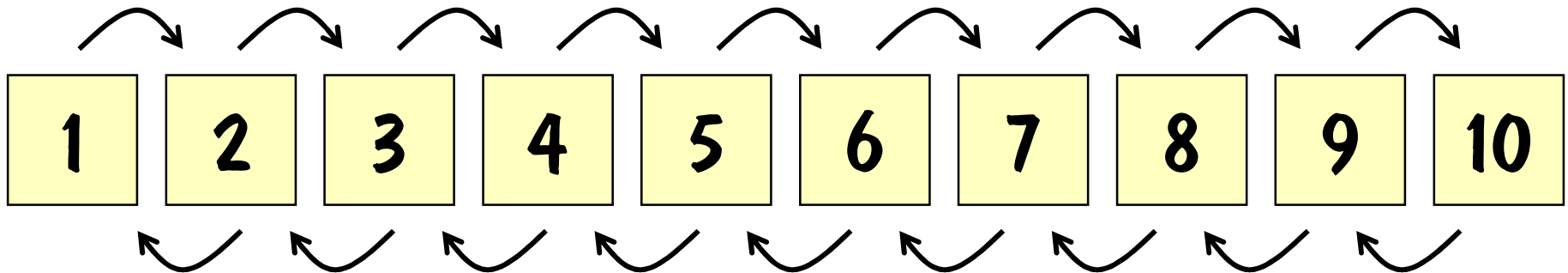


Which number for this many dots?





Get one bigger each time  
in this direction



Get one smaller each  
time in this direction

Which number is one more than 4?





Which number is one more than 4?



Which number is one more than 9?



Which number is one more than 9?



Which number is one more than 6?



Which number is one more than 6?



Which number is one  
less than 3?



Which number is one  
less than 3?



Which number is one  
less than 7?





Which number is one  
less than 7?



Which number is one  
less than 10?



Which number is one  
less than 10?

