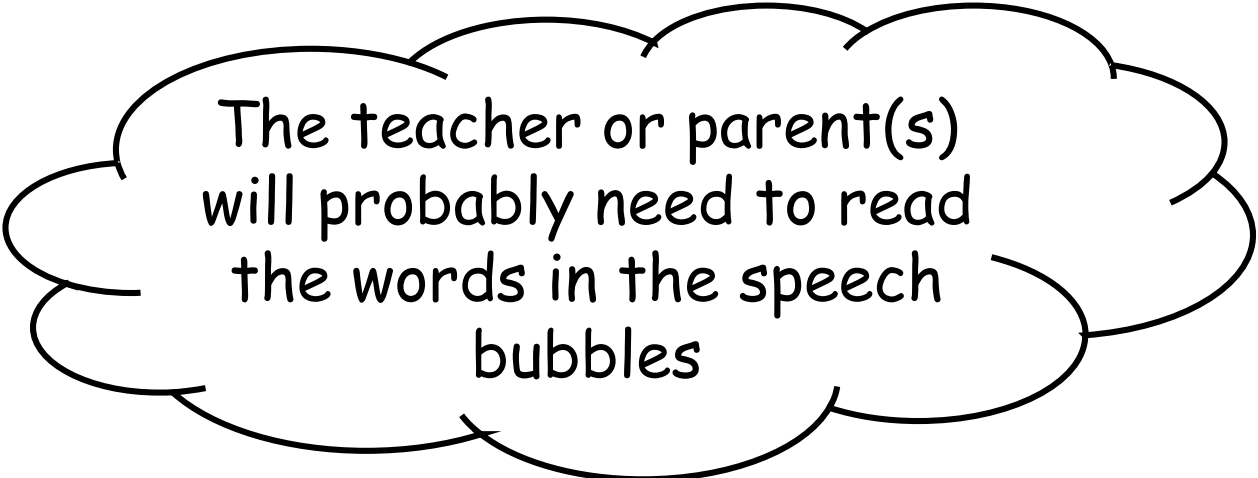


Multiples of Two

Objective: Count in multiples of 2
up to 100

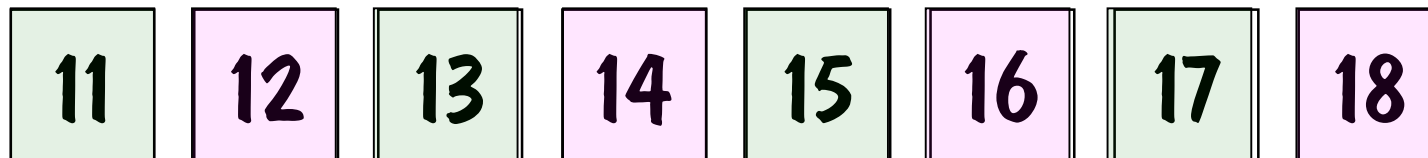
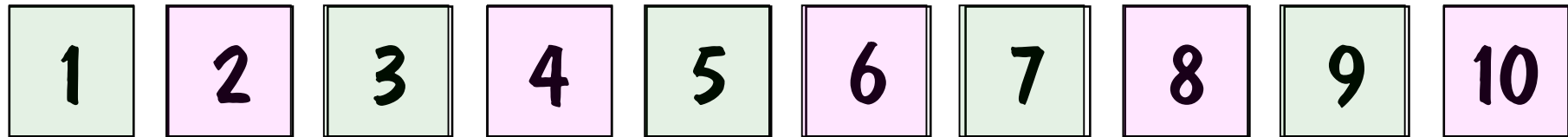


The teacher or parent(s)
will probably need to read
the words in the speech
bubbles

Terms and Conditions

To the best of the producer's knowledge, the academic content of this booklet is accurate but errors and omissions may be present and Brain-Cells: E.Resources Ltd cannot be held responsible for these or any lack of success experienced by individuals or groups or other parties using this material. The presentation is intended as support material for NC maths and is not a comprehensive pedagogy of all the maths topics designated by the National Curriculum for this level. The copyright proprietor has licensed this presentation for the purchaser's use as a personal learning aid and prohibits copying or reproduction in part or whole or its publication on the Internet or other media without the written permission of Brain-Cells: E.Resources Ltd.

Whole numbers can
be **odd** or **even**



These are **even**
numbers

These are **odd**
numbers

A free sheet to do this activity is available from www.brain-cells.co.uk

The finished sheet will look like this...

Multiples of 2 - Even Numbers

Using a coloured crayon, shade in all the even numbers by continuing the pattern.

1	2	3	4	5	6	7	8	9	10
11	12	13	14	15	16	17	18	19	20
21	22	23	24	25	26	27	28	29	30
31	32	33	34	35	36	37	38	39	40
41	42	43	44	45	46	47	48	49	50
51	52	53	54	55	56	57	58	59	60
61	62	63	64	65	66	67	68	69	70
71	72	73	74	75	76	77	78	79	80
81	82	83	84	85	86	87	88	89	90
91	92	93	94	95	96	97	98	99	100

2

4

6



10

12

What is the missing number in the pattern?



2

4

6

8

10

12

What is the missing number in the pattern?



6

8



12

14

16

What is the
missing number in
the pattern?



6

8


10

12

14

16

What is the
missing number in
the pattern?



8

10

12



16

18

What is the missing number in the pattern?



8

10

12

14

16

18

What is the
missing number in
the pattern?



10

12

14



18

20

What is the missing number in the pattern?



10

12

14

16

18

20

What is the missing number in the pattern?



2

4



8

10

12

What is the
missing number in
the pattern?



2

4

6

8

10

12

What is the missing number in the pattern?



12

14

16

20

22

What is the missing number in the pattern?



12

14

16

18

20

22

What is the missing number in the pattern?



2

4

6

8

10

In this number pattern, what is the next number?



2

4

6

8

10

12

In this number pattern, what is the next number?



6

8

10

12

14

In this number pattern, what is the next number?



6

8

10

12

14

16

In this number pattern, what is the next number?



18

20

22

24

26



In this number pattern, what is the next number?



18

20

22

24

26

28

In this number pattern, what is the next number?



20

22

24

26

28



In this number pattern, what is the next number?



20

22

24

26

28

30

In this number pattern, what is the next number?



32

34

36

38

40



In this number pattern, what is the next number?



32

34

36

38

40

42

In this number pattern, what is the next number?



16

18

20

In this number pattern, what are the next three numbers?



16

18


20

22

24

26

In this number pattern, what are the next three numbers?



50

52

54



In this number pattern, what are the next three numbers?



50

52


54

56

58

60


In this number pattern, what are the next three numbers?



86

88

90



In this number pattern, what are the next three numbers?



86

88


90

92

94

96

In this number pattern, what are the next three numbers?



78

80

82



In this number pattern, what are the next three numbers?



78

80


82

84

86

88

In this number pattern, what are the next three numbers?



64

66

68



In this number pattern, what are the next three numbers?



64

66


68

70

72

74

In this number pattern, what are the next three numbers?



50

52

54



In this number pattern, what are the next three numbers?



50

52

54

56

58

60

In this number pattern, what are the next three numbers?

